

**SATCHASI CHHATRA MANGAL MERIT TALENT SEARCH TEST**  
**(SCMMTST)**  
**2023**



**REG. NO. : SO010324/1970-71**

Name of the Student: .....  
Roll No:..... Zone:.....  
Name of the Centre: .....  
Address: .....  
.....Pin Code.....

**Class: III**  
**Full Marks: 100**  
**Time: 12 NOON – 2 PM**  
**Date of Examination:**  
**7<sup>th</sup> May, 2023**  
Signature of Invigilator: .....  
  
Signature of Center In-Charge  
.....

**FOR STUDENTS**

**FOR EXAMINER**

**INSTRUCTIONS**

- YOU WILL ANSWER IN QUESTION PAPER
- YOU MUST ANSWER ALL QUESTIONS.
- DO NOT LOOK OTHER & OUTSIDE.
- ONLY CORRECT ONE WILL BE MARKED.
- YOU MAY MARK TICK (V) OR ROUND WITH YOUR PEN.
- DO NOT USE WOOD PENCIL.
- IF YOU WILL MARK TWO/THREE/FOUR, THEN THAT WILL BE CANCELLED.
- YOU DO NOT DO YOUR ROUGH WORK IN THE QUESTION PAPER.
- FIRST YOU THINK AND THEN YOU DO.
- YOUR ACHIEVEMENT IS ONLY FOR YOU.
- IT HAS NO RELATION WITH YOUR REGULAR CLASS RESULT
- ALL QUESTIONS CARRY EQUAL MARK (I.E. 1)
- BEFORE THE FINAL STARTING BELL YOU WRITE YOUR NAME, ROLL NUMBER, ZONE AND ADDRESS.
- 100 QUESTIONS MUST BE ANSWERED WITHIN 2 HOURS.
- NO EXTRA TIME WILL BE GIVEN FOR YOU FOR ANY CIRCUMSTANCE.
- **ONLY YOU CAN DEVELOP YOURSELF.**

**TABLE FOR OBTAINED MARKS**

TYPE QUESTION	TOTAL MARKS	OBTAINED MARKS
<b>S A T</b>	<b>50 (FIFTY)</b>	
<b>M A T</b>	<b>50 (FIFTY)</b>	
<b>TOTAL</b>	<b>100</b>	

Signature of Examiner:  
.....

Signature of Coordinator:  
.....

Date:

# Subject Ability Test (SAT)

## Class - III

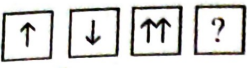

1. 'সকল ধরা হেসে ওঠে' - এখানে 'ধরা' শব্দটির অর্থ কি?  
a) চোরধরা                      b) পৃথিবী                      c) সূর্য                      d) টাঁদ
2. নৌকা যাত্রা কবিতায় কটা পাল তুলে দেওয়ার কথা বলা হয়েছে?  
a) পাঁচটা ছটা সাতটা                      b) চারটে পাঁচটা ছটা                      c) একশোটি                      d) কোনোটিই নয়
3. দাওয়া শব্দের অর্থ কি?  
a) মাটি                      b) জল                      c) বারান্দা                      d) হাত
4. মাত্রাহীন বর্ণের উদাহরণ হল —  
a) প                      b) গ                      c) চ                      d) কোনোটিই নয়
5. Which of the following is a vegetable food?  
a) Guava                      b) Lemon                      c) Cabbage                      d) Apple
6. I guard your house. I eat meat. I wag my tail. Who am I?  
a) cat                      b) horse                      c) cow                      d) dog
7. A Lizard belongs to family of —  
a) Mammal                      b) Reptiles                      c) Amphibious                      d) none of this
8.  $8 \times 0 = ?$   
(a) 8                      (b) 2                      (c) 3                      (d) 0
9. The tenth place digit of number 126 is .....  
(a) 2                      (b) 1                      (c) 6                      (d) 0
10.  $16 =$  How many twos are added ?  
(a) 4                      (b) 6                      (c) 8                      (d) None of these
11. How many four digits number will be formed by 1,2,3,0?  
(a) 1                      (b) 3                      (c) 4                      (d) 6
12. What will be the sum of three digits highest and lowest number whose are formed by 5,7,3 ?  
(a) 1110                      (b) 1111                      (c) 1112                      (d) 1113
13. 2, 3, 5, 7, 11, ?  
(a) 9                      (b) 10                      (c) 13                      (d) 14
14. Which gas we breathed?  
(a) Oxygen                      (b) Carbon-di-oxide                      (c) Nitrogen                      (d) Hydrogen
15. Stalk of Morunga (sojina), originally it is the ..... of tree.  
(a) Stem                      (b) Fruit                      (c) Water                      (d) Flower
16. First time (raw) it is vegetable, but after seasoned (ripe) it is fruit. The name is .....  
(a) Potato                      (b) Brinjal                      (c) Orange                      (d) Papaya
17. Synthetic thread is made by .....  
(a) Mineral oil                      (b) Carpus cotton                      (c) Jute                      (d) Bamboo
18. ORS is used for the disease of .....  
(a) Hum                      (b) Diarrhea                      (c) Fever                      (d) Cancer
19. Rabindranath got the 'Nobel' prize in .....  
(a) 1911                      (b) 1916                      (c) 1912                      (d) 1913
20. হাতির ডাককে বলে —  
b) বৃহন                      b) বৃহোন                      c) বিহং                      d) হুয়্যা
21. বাংলাদেশের জাতীয় সংগীতের লেখক হলেন —  
a) কাজী নজরুল                      b) লালন ফকির                      c) রবীন্দ্রনাথ ঠাকুর                      d) রাজিয়া খান
22. কোন ঋতুতে আকাশে পেঁজা তুলোর মতো মেঘ দেখা যায়?  
a) বর্ষা                      b) হেমন্ত                      c) শীত                      d) শরৎ
23. 'জীবন সর্দার' কোন লেখকের ছদ্মনাম —  
a) সত্যেন্দ্রনাথ দত্ত                      b) সুনীল বন্দ্যোপাধ্যায়                      c) সুকুমার রায়                      d) সৎজিৎ রায়
24. A baby deer is called .....  
a) Fawn                      b) Cub                      c) Calf                      d) Foal
25. How many days are there in the month of August?  
a) 30                      b) 28                      c) 31                      d) 29
26. Which season comes after spring in India?  
a) Monsoon                      b) Summer                      c) Winter                      d) early Autumn



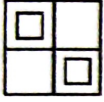
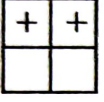
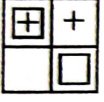
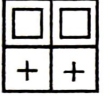
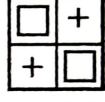
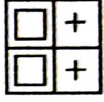
















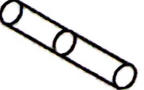
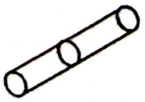
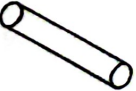
27. Choose the Feminine gender of 'Gander'.  
 a) Vixen                      b) Nanny                      c) Goose                      d) duck
28. Arrange the following letters in the right order :- ukcdnigl  
 a) cukdnilg                      b) kucdginl                      c) duckling                      d) ludckling
29. What sound does a donkey make?  
 a) neigh                      b) bray                      c) bleat                      d) bark
30. Which animal catches mice?  
 a) sheep                      b) dog                      c) cat                      d) none of these
31. How many prime number lies between 0 tp 10 ?  
 (a) 5                      (b) 4                      (c) 3                      (d) 2
32. Young Fish (pona) is at pond in ..... Season.  
 (a) Summer                      (b) Dewy                      (c) Rainy                      (d) Winter
33. Milk, Water, Potato, Fruit – which one is odd ?  
 (a) Water                      (b) Milk                      (c) Potato                      (d) Fruit
34. Which one is not nutritious?  
 (a) Potato                      (b) Chips                      (c) Onion                      (d) Ginger
35. গুরুজন কারা ?  
 a) যারা আমাদের শিক্ষক                      b) বাবা, মা, ঠাকুমা ও ঠাকুরদা  
 c) বাবা, মা, পরিচিত ও অপরিচিত যারা বয়সে বড়ো                      d) পরিচিত বয়সে বড়ো যারা
36. The place where the river meets with the sea is called .....  
 (a) Delta                      (b) Estuary                      (c) Edge                      (d) Fodder
37. Arrange properly: seed, fruit, tree, flower  
 (a) Flower-fruit-seed-tree                      (b) tree-flower-fruit-seed  
 (c) seed-fruit-flower-tree                      (d) seed-fruit-tree-flower
38. Which one is not food?  
 (a) Fish scales                      (b) Caraway seeds                      (c) Coconut shell                      (d) Mustard Flower
39. Leaves are called the the ..... of tree.  
 (a) Kitchen                      (b) Energy room                      (c) Green room                      (d) Shadow Room
40. Which one is flower?  
 (a) Custard Apple                      (b) Clever Fruit                      (c) Pineapple                      (d) Jackfruit
41. Milk, chick, cheese, butte – these are related to .....  
 (a) Cat                      (b) Cow                      (c) Man                      (d) Child
42. Book is our real friend. Similar of the underline word is –  
 a) Enemy                      b) Companion                      c) Close person                      d) Unfriend
43. Which one is garden crops?  
 (a) Paddy                      (b) Jute                      (c) Sugarcane                      (d) Mango
44. This should be looked over, when we collect the packaged food –  
 (a) Weight                      (b) Date                      (c) Packet                      (d) None of these
45. Mango, Tomato, Potato, Pineapple – which one is exported from our country –  
 (a) Potato                      (b) Mango                      (c) Tomato                      (d) Pineapple
46. Which one is wrong –  
 (a) 100 minutes = 1 hour 40 minutes                      (b) 28 or 29 Days = February month  
 (c) 52 weeks = 1 year                      (d) 25 hour = 1 Day 5 hour
47. .... is made by milk.  
 (a) Chanachur                      (b) Nimky                      (c) Chick                      (d) Chips
48. কানামাছি খেলায় কোন ইন্ড্রিয়টির কাজ বন্ধ থাকে?  
 b) জোখ                      b) কান                      c) নাক                      d) জিভ
49. Lack of which vitamin men suffer from night blindness.....  
 (a) B                      (b) A                      (c) D                      (d) e
50. Due to anemia men loose his .....  
 (a) Blood                      (b) RBC                      (c) WBC                      (d) Platelet

# Mental Ability Test (MAT)

## Class - III

51.  Which of the following at '?' —  
 a)       b) ↑↑      c) ↓↓      d) →
52. Write the relation of you with your elder brother's wife?  
 a) Jathima      b) Kakima      c) Pisima      d) Thakuma
53. Logically think which one of the following at ?  

30	45	28	35
60	90	56	?

 a) 50      b) 65      c) 70      d) 86
54. Following which colour of light a car starts to move ....  
 (a) Red      (b) Blue      (c) White      (d) Green
55. If after next day of tomorrow is Sunday, what was the day of yesterday....  
 (a) Thursday      (b) Friday      (c) Wednesday      (d) Saturday
56.  +  = ?  
 a)       b)       c)       d) 
57. PEN + PEN = Rs. 12 ;    PEN + PENCIL = Rs. 10,    BOOK + PENCIL = Rs. 16  
 What will be the value of Book?  
 a) 8.00      b) 6.00      c) 12.00      d) 16.00
- \* From Question No. 58 to Question No. 66, which one is odd?
58. a)       b)       c)       d) 
59. a)       b)       c)       d) 
60. (a) Ladder      (b) Lift      (c) Stair      (d) Roof
61. (a) Lion      (b) Tiger      (c) Fox      (d) Deer
62. (a) Leaf      (b) Flower      (c) Fruit      (d) Root
63. (a) Pumpkin Tree      (b) Gourd Tree      (c) Pea Tree      (d) Puishak Tree
64. a)       b)       c)       d) //
65. a)       b)       c)       d) 
66. a)       b)       c)       d) 
67. West Bengal → Kolkata : India → ?  
 a) Mumbai      b) New Delhi      c) Chennai      d) Bangalore



68. Ram is a son of your mother's father. Who is Ram of you?

- a) Elder Brother      (b) Mama      (c) Kaka      (d) anti

69. A student stay at school  $\frac{1}{4}$  time of a day. How much time (hour) he stay at home?

- a) 6 hour      (b) 18 hour      (c) 4 hour      (d) 16 hour

70. A clock runs 10 minutes fast usually. If the time of that clock is 12.30 pm, then what will be the right time?

- a) 12.40 pm      (b) 12.15 pm      (c) 12.20 pm      (d) 12.45 pm

71. Which volume is greatest among others?

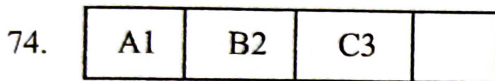
- a) Village      (b) Block      (c) Thana      (d) District

72. If BAT - TAB and MAT - TAM, then what will be SAT = ?

- a) ATS      (b) TAS      (c) STA      (d) None of these



- a)      b)      c)      d)



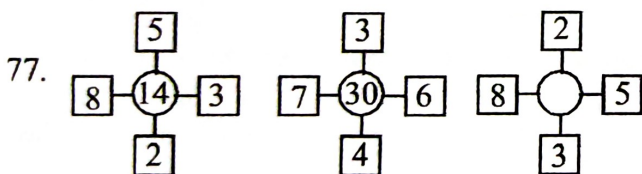
- a) D4      b) B2      c) E5      d) F6

75. In a wall-clock the second's hand takes the time for one round is .....

- a) 1 Sec      b) 1 minute      c) 1 hour      d) 1 Day

76.  $88 \div 11 \div 8 = ?$

- a) 0      b) 1      c) 11      d) 8



- a) 24      b) 46      c) 34      d) 21

78. A packet has 6 pens.  $\frac{1}{3}$  pen of those is inactive. How much pen of that packet is well and active?


- a) 2      b) 4      c) 6      d) None of these

79. Lowest prime number is .....

- a) 1      b) 2      c) 3      d) 9

80. Father's present age is 53 years 1 month 15 days. Son is younger than 28 years 3 month 25 days. The present age of son is .....

- a) 25 year 2 month 10 days      b) 23 year 9 month 20 days  
c) 24 year 9 month 20 days      d) 24 year 8 month 20 days

81.  How many squares in the picture?


- a) 4                      b) 5                      c) 6                      d) 8

82. A, D, G, J, ...?...

- a) H                      b) I                      c) K                      d) M

83. In a row Kamal stands 13<sup>th</sup> position from right hand side and 12<sup>th</sup> position from left hand side. How many members stand at that row?

- a) 25                      b) 26                      c) 24                      d) 23

84.  Fill in the gap (?).

- a) 8                      b) 10                      c) 9                      d) 7

85. If  $5 + 7 = 21$ , and  $9 + 4 = 31$ , then what is the value of  $7 + 9$  (=?)

- a) 16                      b) 71                      c) 15                      d) 61

86. Following which colour of light the car starts to move slowly .....

- a) Red                      b) Blue                      c) Green                      d) Yellow

87. If the day after the day of tomorrow is Sunday. Then yesterday was .....

- a) Thursday                      b) Friday                      c) Wednesday                      d) Saturday

88. Q is longer than P. R is also longer than Q. S is longer than R. Who is very short among them?

- a) Q                      b) P                      c) R                      d) S

89. Following which year carries 366 days –


- a) 2019                      b) 2024                      c) 2022                      d) 2023


90. A, B, C, D, E, F, G, H sit on the chair of a round table. A is opposite to H, B is opposite to G, C is opposite to F, then who will opposite to E?

- a) A                      b) B                      c) G                      d) D

91. Think logically and choose the odd one –

- a) Leaf                      b) Fruit                      c) Flower                      d) Sapling

92.  ছবিটি সম্পূর্ণ করতে কোনটি প্রয়োজন?

- a)                       b)                       c)                       d) 

93. If you want to measure your length, then you use .....

- a) Scale                      b) Meter                      c) Foot                      d) Tape

94. Which one is our national song?

- a) Jana gana mono...                      b) Dhanadhanye puspe vora  
c) Bande matorom..                      d) Amar sonar Bangla..

95. Which is not in the list of ten directions?

- a) South-west                      b) Downward                      c) Rik                      d) South-east

96. Make a sentence with these words: bad, a, this, group, is,

- a) This is bad group                      b) this group is a bad                      c) this is a bad group                      d) bad is a group

97. In a 100mt race Raja defeats Rahul by 5mt. So when Raja completes his race Rahul run.....mt.

- a) 95.5mt.                      b) 94.5mt.                      c) 95.00mt                      d) 94.05mt

98. In a pond regularly the fishes are doubled in size. If the pond is half covered in 25 days, then how many days will take for full?

- a) 50 days                      b) 30 days                      c) 26 days                      d) 27 days

99. Within these animals the most intelligent animal is .....

- a) Elephant                      b) Chompanzee                      c) Monkey                      d) Dog

100. Plantain Flower is related to the tree .....

- a) Banana                      b) Papaya                      c) Potato                      d) Bamboo