

SATCHASI CHHATRA MANGAL MERIT TALENT SEARCH TEST
(SCMST)
2023



REG. NO. : SO010324/1970-71

<p>Name of the Student:</p> <p>Roll No:..... Zone:.....</p> <p>Name of the Centre:</p> <p>Address:</p> <p>.....Pin Code.....</p>	<p>Class: IV</p> <p>Full Marks: 100</p> <p>Time: 12 NOON – 2 PM</p> <p>Date of Examination: 7th May, 2023</p> <p>Signature of Invigilator:</p> <p>Signature of Center In-Charge</p>
--	---

FOR STUDENTS

FOR EXAMINER

INSTRUCTIONS

TABLE FOR OBTAINED MARKS

- YOU WILL ANSWER IN QUESTION PAPER
- YOU MUST ANSWER ALL QUESTIONS.
- DO NOT LOOK OTHER & OUTSIDE.
- ONLY CORRECT ONE WILL BE MARKED.
- YOU MAY MARK TICK (V) OR ROUND WITH YOUR PEN.
- DO NOT USE WOOD PENCIL.
- IF YOU WILL MARK TWO/THREE/FOUR, THEN THAT WILL BE CANCELLED.
- YOU DO NOT DO YOUR ROUGH WORK IN THE QUESTION PAPER.
- FIRST YOU THINK AND THEN YOU DO.
- YOUR ACHIEVEMENT IS ONLY FOR YOU.
- IT HAS NO RELATION WITH YOUR REGULAR CLASS RESULT
- ALL QUESTIONS CARRY EQUAL MARK (I.E. 1)
- BEFORE THE FINAL STARTING BELL YOU WRITE YOUR NAME, ROLL NUMBER, ZONE AND ADDRESS.
- 100 QUESTIONS MUST BE ANSWERED WITHIN 2 HOURS.
- NO EXTRA TIME WILL BE GIVEN FOR YOU FOR ANY CIRCUMSTANCE.
- **ONLY YOU CAN DEVELOP YOURSELF.**

TYPE QUESTION	TOTAL MARKS	OBTAINED MARKS
S A T	50 (FIFTY)	
M A T	50 (FIFTY)	
TOTAL	100	

Signature of Examiner:
.....

Signature of Coordinator:
.....

Date:





Subject Ability Test (SAT)

Class - IV

1. 'কুজন' শব্দের অর্থ লেখ —
a) খারাপ লোক b) অন্য জন c) পাখির ডাক d) কম লোকজন
2. 'আমার বাবা কলম দিয়ে লেখে' - এই বাক্যটিতে ক্রিয়াপদ কোনটি —
a) বাবা b) কলম c) আমার d) লেখে
3. "বিশ্বজোড়ো পাঠশালা মোর, সবার আমি ————।" - শূন্যস্থান পূরণ কর —
a) ছবি b) ছাত্রী c) ছাত্র d) ছাতা
4. 'হ য ব র ল' কার লেখা?
a) উপেন্দ্রকিশোর রায়চৌধুরী b) রবীন্দ্রনাথ ঠাকুর c) সুকুমার রায় d) প্রমোদ মিত্র
5. নাবিক শব্দের সন্ধি বিচ্ছেদ করলে পাওয়া যায় —
a) নৈ + ইক b) নৌ + ইক c) না + বিক d) নব্য + ইক
6. নাসিক্য ধ্বনি কোনগুলি?
a) ষ, ঞ, ণ, ন, ম b) ক, গ, চ, জ c) ষ, র, ল, ব d) শ, য, স, হ
7. সূর্য শব্দটির বর্ণ বিশ্লেষণ করলে হয় —
a) স + উ + র্ + ম্ + অ b) স + উ + র্ c) সূ + র্ + ম d) সূ + র্ + ম্ + অ
8. ইয়াসুয়াকি-চানের নিম্নলিখিত কোন রোগের জন্য গাছে চড়তে পারত না?
a) টাইফয়েড b) করোনা c) পোলিয়ো d) জন্টিস
9. এক কথায় প্রকাশ কর — "ইন্ডিয়াকে জয় করেছেন যিনি"
a) জিতেন্দ্র b) ইন্দ্রজিৎ c) জয়চাঁদ d) কোনটিই নয়
10. নীললোহিত কার ছদ্মনাম?
a) সুনীল গঙ্গোপাধ্যায় b) রবীন্দ্রনাথ ঠাকুর c) কালিদাস d) অখিল নিয়োগী
11. The name of baby deer?
a) Puppy b) Foal c) Fawn d) Chick
12. A hen can _____ . - Fill in the blank.
a) swim in the pond d) weave a nest c) lay eggs d) talk with us
13. Child of one's aunt or uncle.
a) Cousin b) Sister c) Brother d) Brother-in-law
14. Fill in the blanks with the correct option. A _____ of Ants.
a) Group b) Litter c) School d) Colony
15. Seven hundred fifty three = ?
a) 700 + 50 + 3 b) 70 + 500 + 3 c) 7 + 50 + 300 d) 70 + 50 + 30
16. Dividend = x +
a) Divisor x quotient + remainder b) remainder x quotient + divisor
c) divisor x remainder + quotient (d) none of these
17. The value of one badminton if Rs. 90. Rana bought One pair badminton and gave Rs. 200 to the shopkeeper. How much he will receive from the shop-keeper?
a) Rs. 20 b) Rs.30 c) Rs.40 d) Rs.50
18. World environmental Day is celebrated on
a) 5th June b) 6th June c) 7th June d) 8th June
19. Iodin is available in
a) Tea b) Salt c) Rice d) Chocolate
20. The plant has no leaf.
a) Cactus b) Stone Chipper c) Bamboo d) None of These
21. In air the maximum quantity of gas is
a) Oxygen b) Carbon-di-oxide c) Helium d) Nitrogen
22. The ice melted into water at temperature and water is freezing at
a) 0 degree & 100 degree b) 100 degree & 0 degree c) 0 degree & 0 degree d) none of these
23. The sound of lion is call —
a) trumpet b) moo c) bark d) roar
24. The old man is suffering _____
a) of b) over c) in d) from
25. The opposite gender of mare is called —
a) stag b) horse c) deer d) sheep

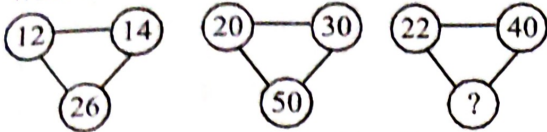
26. Fill in the blanks to make it present continuous tense.

The car _____ (move)

- a) are moving b) is moving c) is moving d) moving
27. Which of the following is divisible by 9?
a) 487082 b) 725634 c) 685723 d) 354123
28. Hugh-N-sang came in India in the kingdom of
a) Kaniska b) Samudragupta c) Akbar d) Harsha Bardhan
29. The name of the highest mountain in the world
a) Mount Everest b) K2 c) Kanchenjunga d) None of these
30. Who discovered the vaccine of Smallpox ?
a) Louis Pasteur b) Galilio c) Edward Gener d) Newton
31. Who was the second Woman President in India?
a) Protiva Patil b) Draupadi Murmu c) Sucheta Kripalani d) Indira Gandhi
32. Which was the oldest civilization in the world?
a) Egyptian b) Sindhu c) Mesopotamia d) None of these
33. The temple-city of India is
a) Ranchi b) Bhubaneswar c) Kolkata d) Madras
34. A almost extinct animal is
a) Elephant b) Tiger c) one horned rhinoceros d) Dynosaurs
35. Which one is metal?
a) Water b) Mercury c) Milk d) Oil
36. Which soil is appropriate for cultivation?
a) Stone soil b) sand Soil c) Alluvial Soil d) Kankur Soil
37. The Werther in the region of see-beach is
a) Temperate b) Huge Cool c) Hot d) Rainy
38. A Green (Rabi) crop is
a) Pea b) Mango c) Jack fruit d) Water-melon
39. The animal, was sent to the space at the first time.
a) Dog named Lyka b) Cat named Lyka c) Man named Lyka (d) Rat named Lyka
40. What is the plural form of knife?
a) knives b) knifs c) knives d) knifess
41. Choose the regular verb –
a) Played b) Write c) Found d) Took
42. A twelve hours clock shows the time 7pm, then what will be the time of twenty four hours clock?
a) 29 pm b) 19 pm c) 9pm d) 00.19am
43. Rama born on 29th February 2012. Her next birthday will be on
a) 2013 b) 2014 c) 2015 d) 2016
44. Following which is equal to 10 milli meter –
a) 100 centimeter b) 1000 centimeter c) 10 centimeter d) 1 centimeter
45. $\frac{8}{8} + \frac{7}{7} + \frac{6}{6} + \frac{5}{5} + \frac{4}{4} + \frac{3}{3} + \frac{2}{2} + \frac{1}{1} = .$
a) 2 b) 3 c) 4 d) 8
46. Which one is correct ?
a) $\frac{5}{8} < \frac{2}{8}$ b) $\frac{5}{8} > \frac{2}{8}$ c) $\frac{4}{9} < \frac{1}{4}$ d) $\frac{3}{7} < \frac{2}{7}$
47. Which one is trapezium –
a)  b)  c)  d) 
48. No of teeth of a complete matured person -
a) 10 pair b) 16 pair c) 12 pair d) 20 pair
49. The sting of ant is full of
a) Malik Acid b) Formic acid c) Folik Acid d) Tartaric Acid
50. Why the body of porcupine is full with thorn?
a) For drinking water b) for self-defense c) for easy movement d) for sheltering

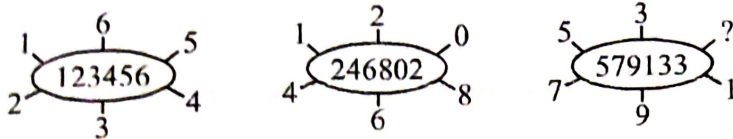
Mental Ability Test (MAT)
Class - IV

51. What is the number at?



- a) 62 b) 63 c) 88 d) 18

52. What is the number at?



- a) 5 b) 7 c) 9 d) 3

53. If ABCDE = 12345. Then what will be value of FGHI ?

- a) 6789 b) 1234 c) 1793 d) 8769

54. The greatest number is formed by 2, 4, 7, 6 and that is.....

- a) 7642 b) 6724 c) 4276 d) 2764

55. Follow the row and write the value of ?



- a) 54 b) 55 c) 56 d) 59

56. West Bengal : Kolkata :: India :

- a) Mumbai b) Kolkata c) New Delhi d) Puri

57. Which pair is correct?

- a) Sweeper bird – Crow b) National Bird – Duck
c) Messenger of spring – Sparrow d) Tailor Bird : Tea

58. Which one is odd –

- a) Flower b) Fruit c) Leaf d) Sky

59. ২নং জ্যামিতিটি কী?


- a) ত্রিভুজ b) চতুর্ভুজ c) বৃত্ত d) সরলরেখা

60. UMBRELLA – Here how many letters are not vowel ?

- a) 5 b) 7 c) 6 d) 8

61. Area of which is very small than other –

- a) Village b) District c) State d) Country



- a) b) c) d)

Find the odd one.

63. Gun : Bullet :: Woven : ?

- a) Field b) House c) Roof d) Smoke

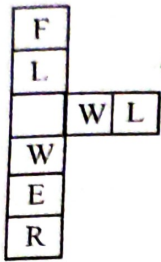
64. How many times you collect water by B pot from A pot.

- a) 10 times b) 11 times c) 12 times d) 15 times

65. abc, bed, cde, deg, efg, fgh কোনটি বেমানান?

- a) bcd
- b) cde
- c) abc
- d) deg

66. Choose a letter from the following and complete the table.



- a) O
- b) P
- c) Q
- d) R

67. Follow this figure and find how many circles are here?



- a) 5
- b) 6
- c) 7
- d) 4

68. What is the relation of you with the father of your mother's brother?

- a) Grand-father
- b) Uncle
- c) uncle (mama)
- d) Uncle (Mesomosai)

69. At what time in the clock the three hands are in same position?

- a) 12 o'clock
- b) 1 o'clock
- c) 2 o'clock
- d) 3 o'clock

70. By which number of way you can reach from A to B -



- a) 1
- b) 2
- c) 3
- d) 4

71. Which pot will fill fast?



- a) A
- b) B
- c) B & C
- d) C

72. What is the time now?



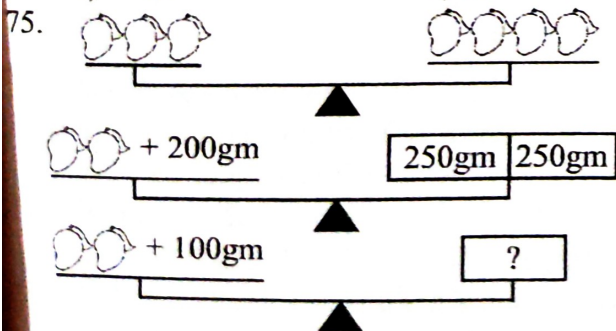
- a) 9:45
- b) 10:45
- c) 10:09
- d) 9:10

73. Three years back From today what was year of English Calender?

- a) 2020
- b) 2021
- c) 2022
- d) 2023

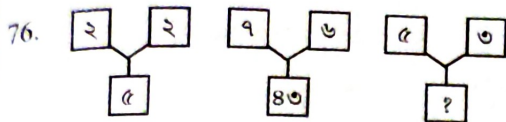
74. One Ass = 4 ; One Horse = 6 ; then Two Asses + Two Horses = ?

- a) 22
- b) 20
- c) 24
- d) 28



Choose the right one -

- a) 500 gm
- b) 600 gm
- c) 700 gm
- d) 800 gm



Choose the right one –

- a) 14 b) 16 c) 18 d) 20
77. Fill in the blank with appropriate number.
3, 9, 27, 81, ___?___
- a) 6 b) 90 c) 30 d) 243
- 78.
- How much area of this picture is coloured?
- a) $\frac{1}{6}$ b) $\frac{2}{6}$ c) $\frac{3}{6}$ d) $\frac{4}{6}$
79. Lowest prime number is
- a) 1 b) 2 c) 3 d) 5
80. If BALL = CAP, CAP = PENCIL, PENCIL = BAG, BAG = RUBBER, So Rohit when went outside, he used
- a) CAP b) ROBBER c) PENCIL d) BAG
81. RAM carries bag with 2kg apple, 3kg guava and 7kg mango. How will be the weight of Bag only with apple and mango?
- a) 9 kg b) 7 kg c) 12 kg d) 10 kg
82. Write the name of the coloured part this figure?
-
- a) Quadrilateral b) Triangle c) Circle d) Rectangle
83. How many arms of this figure?
- a) 9 b) 10 c) 11 d) 12
84. Put the appropriate sign – $\frac{6}{7}$ (?) $\frac{3}{17}$
- a) < b) > c) = (d) None of these
85. How many vowels are in this word - Elephant
- a) $\frac{3}{8}$ b) $\frac{2}{8}$ c) $\frac{6}{8}$ d) $\frac{5}{8}$
86. Which one is wrong?
- a) Quadrilateral has four arms b) Triangle has three angle
- c) Rectangle has five arms d) Circle is covered a curved line
87. Rama is suffering from fever. The thermometer shows her body temperature
- a) 80 degree F b) 90 degree F c) 100 degree F d) 85 degree F
88. Sohini wants to go her uncle's house which is in the capital of India. So she wants to go –
- a) Patna b) Kolkata c) Delhi d) Mumbai
89. A = 1, B = 2, C = 3, the value of (B+C) x A = ?
- a) 5 b) 6 c) 7 d) 8
90. Suddenly a boy of your class losses his sense, then what you ought to do –

- a) to sit without any sound
- b) to give water to his face
- c) to wait for final bell
- d) to look at the other side

91. My mother tell me to buy 3 pairs yellow pen, 4 4 dozens red pen and 2 green pen. So how much pens I will buy –

- a) 50
- b) 56
- c) 57
- d) 58

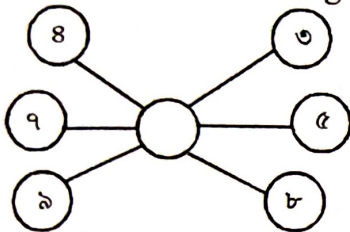
92. Rahim wants to go Bengaluru by air from Kolkatata. From which airport he starts his journey?

- a) Mahatma Gandhi International Airport
- b) Bagdogra Airport
- c) Netaji Subhashchandra Bose International Airport
- d) Asansole Airport

93. Sachin collects 128 runs. What is the local value of 2?

- a) Greater than the local value of 1
- b) 200
- c) less than the local value of 1
- (d) 2

94. Which number is missing?



- a) 6
- b) 3
- c) 4
- d) 8

95. If the red blood corpuscle decreases it's number in our body, then the..... disease will be.

- a) Dengue
- b) Anemia
- c) Malaria
- d) None of these

96. Onion is the part of a tree.

- a) Flower.
- b) Root
- c) Stem
- d) Leaf

97. The direction of the upper of every geographical map is

- a) North
- b) South
- c) East
- d) West

98. The signature every writer is always at the position of a letter.

- a) Left and upper
- b) Left and Lower
- c) Right and Upper
- d) Right and lower

99. How many digits are there in any Indian pincode?

- a) 4
- b) 5
- c) 6
- d) 7

100. Which colour is not in the Rainbow?

- a) Red
- b) Yellow
- c) White
- d) Green